

EE 308 – Quiz 10
 April 20, 2012

Name: _____

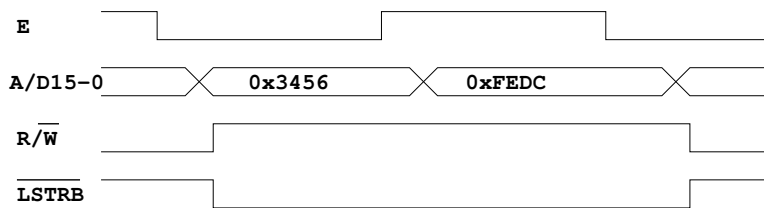
Name: _____

Name: _____

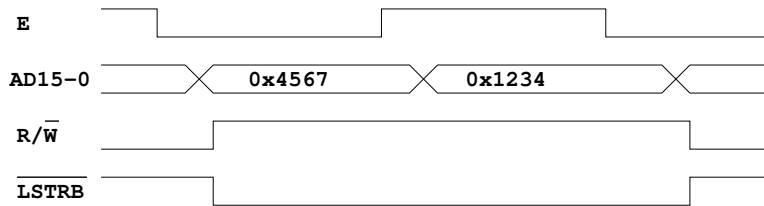
Name: _____

The figures below show some things which might be on the HC12 bus in expanded mode. For each figure, indicate if that combination of signals can occur. If so, explain what the memory cycle does – read or write, 8-bit or 16-bit transfer, what data is read from or written to which byte(s). If the combination of signals cannot occur, explain why not.

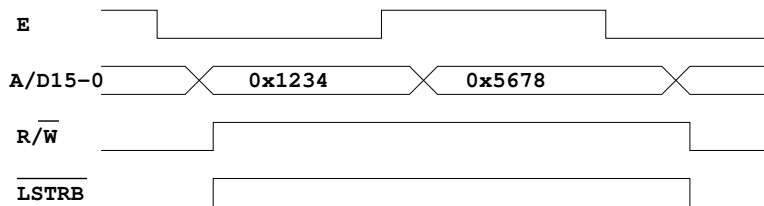
1.



2.



3.



4.

